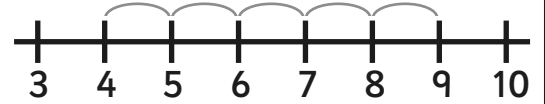


# Addition and Subtraction to 10 with a Number Line


Example:

$$\underline{9} - 5 = \textcircled{4}$$

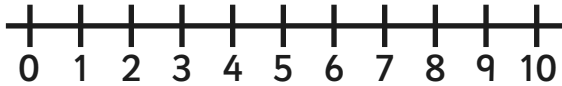


Can you work out the answer and draw a picture or write a sentence about it?  
The first one is done for you.

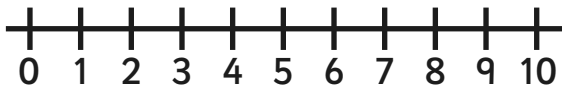
$$10 - 6 =$$



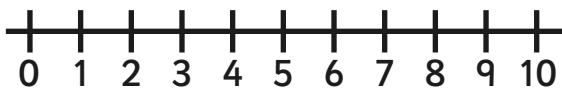
*My Dad buys 10 eggs but breaks 6 of them. How many eggs does he have left?*



$$7 + 2 =$$



$$1 + 9 =$$



$$7 - 2 =$$

