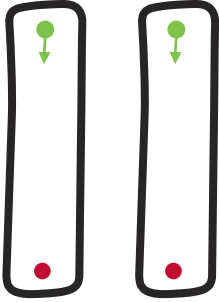
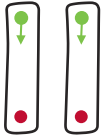
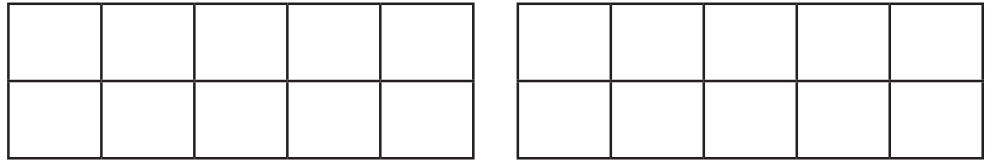



# All about the Number...



Draw 11 dots on the ten-frames.



Nancy has 11 coins. Can you draw them?



Which sweet jar has 11 sweets? Circle the jar.

