


Convert pounds and pence

1 a) Circle £1



b) Circle £1



c) Circle £1



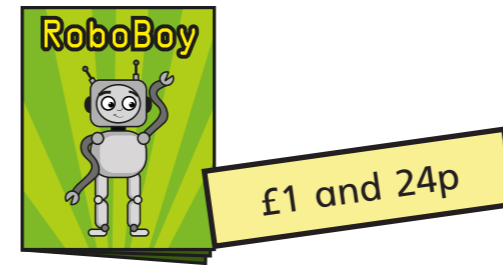
d) Circle £10



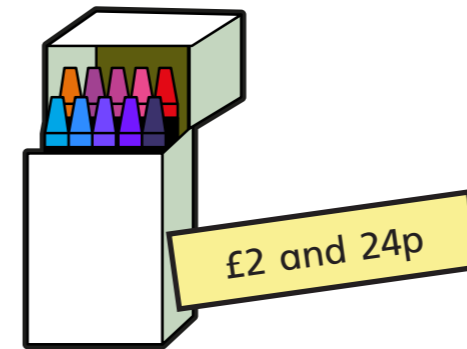
2 How many 1p coins do you need to make £1?

100

3 Write the price of each item in pence.



124 p



224 p



645 p

4 Write each amount in pounds and pence.

a) 274p = £ 2 and 74 p b) 592p = £ 5 and 92 p

374p = £ 3 and 74 p 591p = £ 5 and 91 p

474p = £ 4 and 74 p 590p = £ 5 and 90 p

c) $111\text{p} = \text{£ } \boxed{1} \text{ and } \boxed{11} \text{ p}$

d) $405\text{p} = \text{£ } \boxed{4} \text{ and } \boxed{5} \text{ p}$

5 Annie has some coins.



a) How much money does Annie have? $\text{£ } \boxed{3} \text{ and } \boxed{6} \text{ p}$

b) What is 10p more? $\text{£ } \boxed{3} \text{ and } \boxed{16} \text{ p}$

What is 10p less? $\text{£ } \boxed{2} \text{ and } \boxed{96} \text{ p}$

c) What is 100p more? $\text{£ } \boxed{4} \text{ and } \boxed{6} \text{ p}$

What is 100p less? $\text{£ } \boxed{2} \text{ and } \boxed{6} \text{ p}$


6 What amount is represented in each box?



$\text{£ } \boxed{5} \text{ and } \boxed{5} \text{ p}$




$\text{£ } \boxed{4} \text{ and } \boxed{5} \text{ p}$



$\text{£ } \boxed{5} \text{ and } \boxed{50} \text{ p}$



7 Eva empties out her money box.



How much money was in her money box? $\text{£ } \boxed{15} \text{ and } \boxed{67} \text{ p}$

How did you count the coins? Compare with a partner.

8 a) What is the fewest number of coins you can use to represent 315p?

4 coins: £2, £1, 10p, 5p

b) Use 6 coins to make an amount that is more than £3, but less than £4. Draw your answer.



Compare answers with a partner.