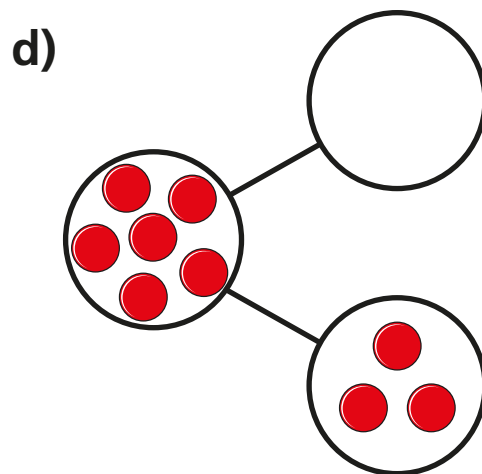
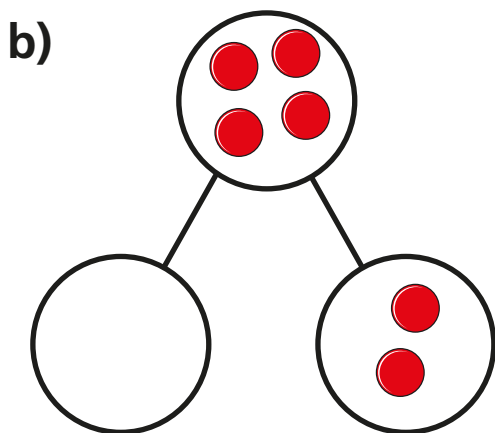
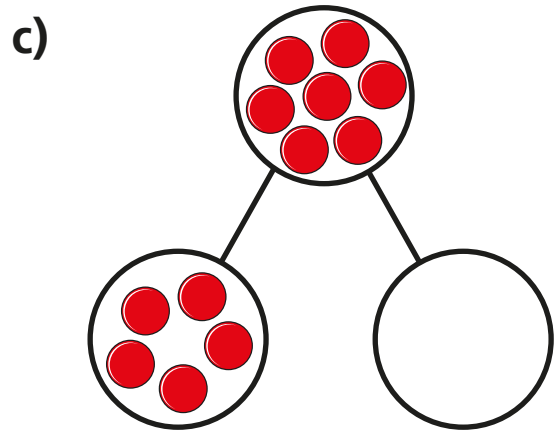
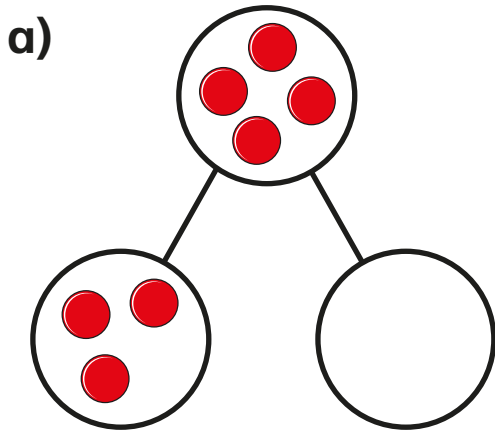


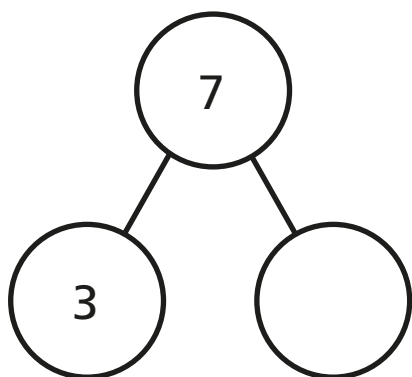
Find a part

I Draw counters to complete the part-whole models.



- 2** Complete the part-whole models.
Complete the sentences.

a)

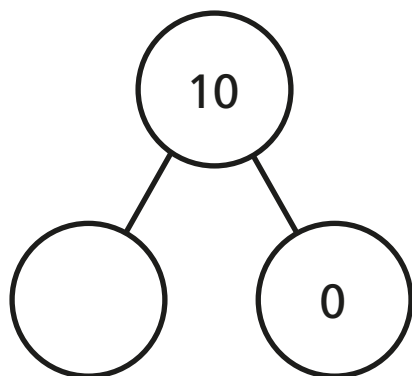


The whole is

is a part.

is a part.

b)



The whole is

is a part.


is a part.

- 3** There are 6 apples in total.

2 apples are green.

The rest are red.

Colour the apples.



Complete the number sentence. $2 + \square = 6$



- 4 There are 8 shapes in total.
3 of the shapes are squares.
The rest are circles.
Draw a picture to show this.



How many circles are there?

Complete the number sentence.

$$\square + \square = \square$$

- 5 Complete the number sentences.

$$4 + \square = 5$$

$$4 + \square = 4$$

$$\square + 1 = 4$$

$$5 = \square + 4$$

