

Compare amounts

1 Build and compare the amounts then complete the sentences.

a

Amount 1	Amount 2

The largest number is _____.

The smallest number is _____.

_____ > _____ _____ < _____

b

Amount 1	Amount 2

The largest number is _____.

The smallest number is _____.

_____ > _____ _____ < _____

c

Amount 1	Amount 2

The largest number is _____.

The smallest number is _____.

_____ > _____ _____ < _____

d

Amount 1	Amount 2

The largest number is _____.

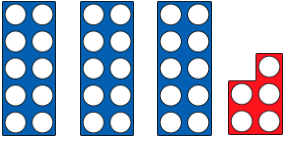
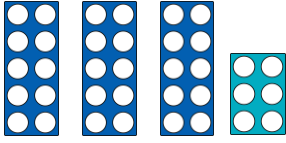
The smallest number is _____.

_____ > _____ _____ < _____

Answers - Compare amounts

1 Build and compare the amounts then complete the sentences.

a



Amount 1	Amount 2
	
35	36

The largest number is 36.

The smallest number is 35.

36 > 35 35 < 36

b

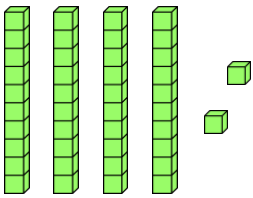
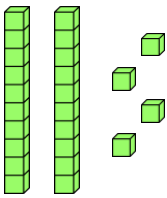
Amount 1	Amount 2
	
60	52

The largest number is 60.

The smallest number is 52.

60 > 52 52 < 60

c

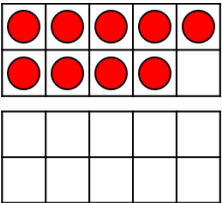
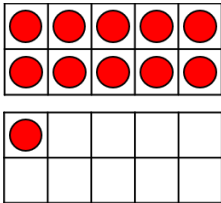
Amount 1	Amount 2
	
42	24

The largest number is 42.

The smallest number is 24.

42 > 24 24 < 42

d

Amount 1	Amount 2
	
9	11

The largest number is 11.

The smallest number is 9.

11 > 9 9 < 11