

Missing numbers



Complete the grids by filling in the missing numbers. Use a hundred square to help you.

a

23	24	
	34	
	44	

b

78		
	89	90
		100

c

41	42	
		53

d

	16	
25		27

e

	65	
		76
84		

f

44		
54		56

g

	77	
	97	

h

	61	
		72

Missing numbers



Complete the grids by filling in the missing numbers. Use a hundred square to help you.

a

23	24	
	44	

b

78		
	89	90

c

41	42	

d

25		
	36	

e

	65	
		76

f

44		
54		

g

	77	

h

	61	

Missing numbers



Complete the grids by filling in the missing numbers. Use a hundred square to help you.

a

	24	

b

	89	

c

	42	

d

	36	

e

		76

f

44		

g

	97	

h

		72

Answers - Missing numbers

a

23	24	25
	34	
43	44	

b

78	79	
88	89	90
		100

c

	32	
41	42	
51		53

d

	16	
25	26	27
	36	

e

	65	66
	75	76
84		

f

44		46
54	55	56
64		

g

	77	78
86	87	
	97	

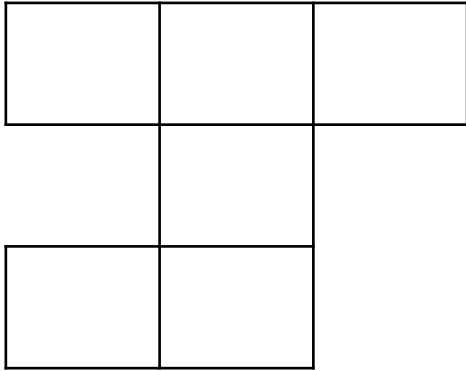
h

50		
60	61	62
		72

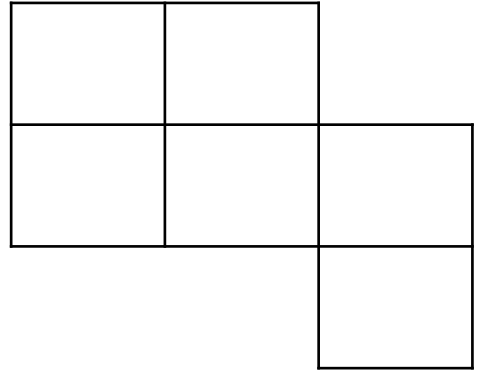
Number grids

Create your own number grids using a hundred square to help you.

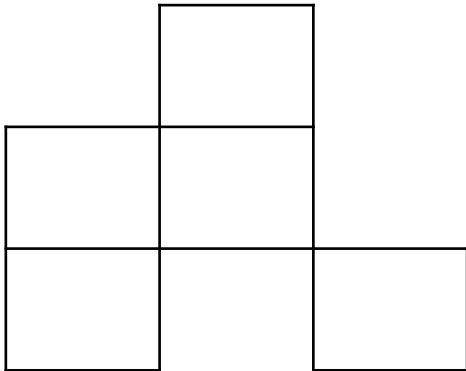
a



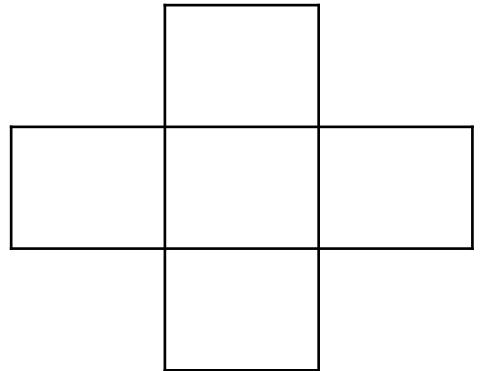
b



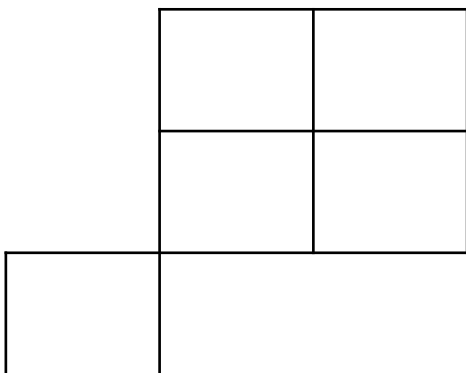
c



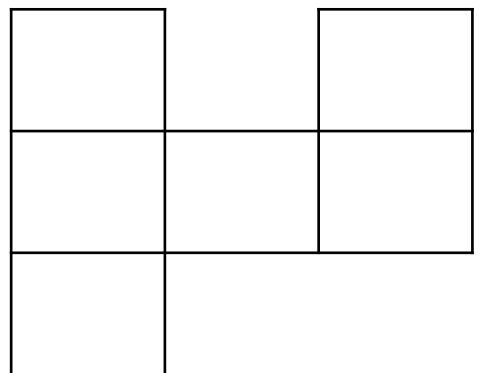
d



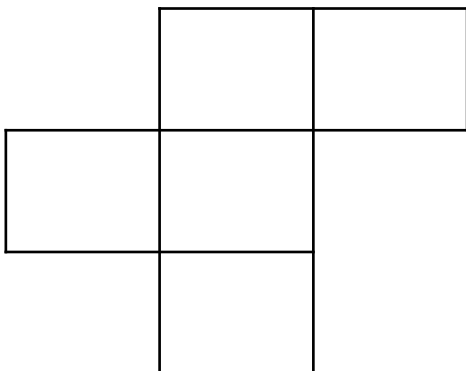
e



f



g



h

