

- 4 Ron works out $476 + 35$

$$\begin{array}{r} 476 \\ + 35 \\ \hline 826 \\ \hline 1 \end{array}$$


What mistake has Ron made?

Work out the correct answer.

511



- 5 Alex collects stickers.
She has collected 286 stickers.
She only needs 69 more stickers to fill the album.



How many stickers does the album hold when full?

355



- 6 Here are some digit cards.

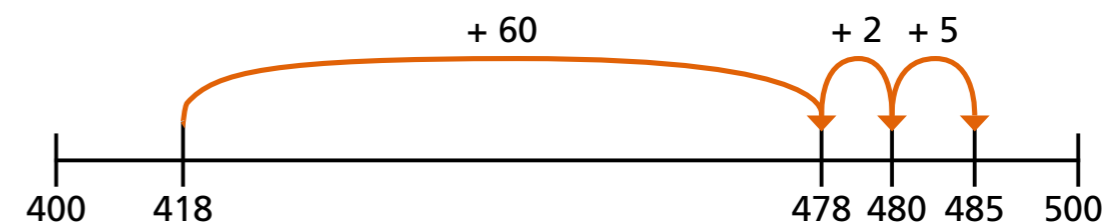


Arrange the digits to make two different additions that have just one exchange. *Various answers e.g.*

		H	T	O
		8	2	7
	+		3	5
		8	6	2
				1

		H	T	O
		2	5	7
	+		3	8
		2	9	5
				1

- 7 Mo uses a number line to work out an addition.

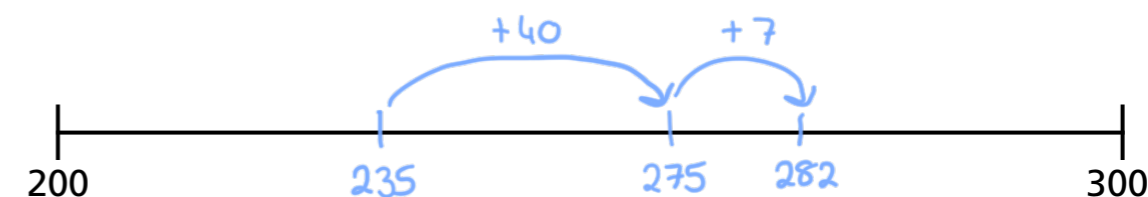


What addition has Mo worked out?

$$418 + 67 = 485$$

- 8 Use the number lines to complete the additions.

a) $235 + 47 = 282$



b) $235 + 87 = 322$

