

# Comparing time



- 1 Year 1 recorded the time it took them to complete a race.  
Circle **faster** or **slower** to compare their times.

a



Jess:  
30 seconds

Dom is slower / faster than Sue.



Dom:  
40 seconds

Sue is slower / faster than Jess.



Sue:  
20 seconds

Jess is slower / faster than Dom.

Dom is slower / faster than Jess.

b



Che:  
20 seconds

Che is slower / faster than Kat.



Kat:  
23 seconds

Kat is slower / faster than Matt.



Matt:  
25 seconds

Matt is slower / faster than Che.

Kat is slower / faster than Che.

c



Beth:  
32 seconds

Beth is slower / faster than Mo.



Mo:  
24 seconds

Mo is slower / faster than Tam.



Tam:  
27 seconds

Tam is slower / faster than Mo.

Mo is slower / faster than Beth.

# Comparing time



- 1 Buses A, B and C leave the bus station in the morning.  
Complete the sentences using **earlier** or **later** to compare their times.

a

Bus A



Bus A leaves earlier / later than Bus B.

Bus B



Bus B leaves earlier / later than Bus C.

Bus C



Bus C leaves earlier / later than Bus A

Bus B leaves earlier / later than Bus A.

b

Bus A



Bus A leaves earlier / later than Bus B.

Bus B



Bus B leaves earlier / later than Bus C.

Bus C



Bus C leaves earlier / later than Bus A.

Bus A leaves earlier / later than Bus C.

c

Bus A



Bus A leaves earlier / later than Bus B.

Bus B



Bus B leaves earlier / later than Bus C.

Bus C



Bus C leaves earlier / later than Bus A.

Bus B leaves earlier / later than Bus A.

# Comparing time



- 1 Year 1 recorded the time it took them to complete a race.  
Complete the sentences using **faster** or **slower** to compare their times.

a



Jess:  
30 seconds

Dom is \_\_\_\_\_ than Sue.

Sue is \_\_\_\_\_ than Jess.



Dom:  
40 seconds

Jess is \_\_\_\_\_ than Dom.

Sue is \_\_\_\_\_ than Dom.



Sue:  
20 seconds

Jess is \_\_\_\_\_ than Sue.

Dom is \_\_\_\_\_ than Jess.

b



Che:  
20 seconds

Che is \_\_\_\_\_ than Kat.

Kat is \_\_\_\_\_ than Matt.



Kat:  
23 seconds

Matt is \_\_\_\_\_ than Che.

Kat is \_\_\_\_\_ than Che.



Matt:  
25 seconds

Che is \_\_\_\_\_ than Matt.

Matt is \_\_\_\_\_ than Kat.

c



Beth:  
32 seconds

Beth is \_\_\_\_\_ than Mo.

Mo is \_\_\_\_\_ than Tam.



Mo:  
24 seconds

Tam is \_\_\_\_\_ than Beth.

Mo is \_\_\_\_\_ than Beth.



Tam:  
27 seconds

Tam is \_\_\_\_\_ than Mo.




Beth is \_\_\_\_\_ than Tam.

# Comparing time






- 1 Buses A, B and C leave the bus station in the morning.  
Complete the sentences using **earlier** or **later** to compare their times.




a

Bus A		Bus A leaves _____ than Bus B.
Bus B		Bus B leaves _____ than Bus C.
Bus C		Bus C leaves _____ than Bus A.
		Bus A leaves _____ than Bus C.
		Bus B leaves _____ than Bus A.
		Bus C leaves _____ than Bus B.

b

Bus A		Bus A leaves _____ than Bus B.
Bus B		Bus B leaves _____ than Bus C.
Bus C		Bus C leaves _____ than Bus A.
		Bus B leaves _____ than Bus A.
		Bus A leaves _____ than Bus C.
		Bus C leaves _____ than Bus B.

c

Bus A		Bus A leaves _____ than Bus B.
Bus B		Bus B leaves _____ than Bus C.
Bus C		Bus C leaves _____ than Bus A.
		Bus B leaves _____ than Bus A.
		Bus A leaves _____ than Bus C.
		Bus C leaves _____ than Bus B.

# Comparing time



- 1 Year 1 recorded the time it took them to complete a race.  
Write six sentences using **faster** or **slower** to compare their times.

a



Jess:  
30 seconds

---

---



Dom:  
40 seconds

---

---



Sue:  
20 seconds

---

---

b



Che:  
20 seconds

---

---



Kat:  
23 seconds

---

---



Matt:  
25 seconds

---

---

c



Beth:  
32 seconds

---

---



Mo:  
24 seconds

---

---



Tam:  
27 seconds

---


---


# Comparing time




- 1 Buses A, B and C leave the bus station in the morning.  
Complete the sentences using **earlier** or **later** to compare their times.

a

Bus A 

Bus B 

Bus C 

---

---

---


---


---

---

b

Bus A 

Bus B 

Bus C 

---

---


---


---


---

---

c

Bus A 

Bus B 

Bus C 

---

---

---

---

---

---

# Challenge cards



Problem solving and reasoning cards:

Write as many sentences as you can to compare the times trains leave in the morning.



A B C D

Year 1 had a race and recorded the time it took to complete. Write possible times between 30 and 50 seconds to match the finishing positions.

1<sup>st</sup> \_\_\_\_\_

2<sup>nd</sup> \_\_\_\_\_

3<sup>rd</sup> \_\_\_\_\_

4<sup>th</sup> \_\_\_\_\_

Use the clues to match the statements to each child.



1<sup>st</sup>



2<sup>nd</sup>



3<sup>rd</sup>

My time is slower than 40 seconds.

My time is 2 seconds quicker than 35 seconds.

My time is half way between 20 and 30 seconds.

Children compete in swimming competition.

Kat was faster than Mo.  
Mo was slower than Dom.  
Dom was faster than Kat.

Who came first? \_\_\_\_\_

Who came second? \_\_\_\_\_

Who came third? \_\_\_\_\_

Kat, Mo and Dan had a race and recorded the time it took them.

Match the times to their position.

41 seconds

43 seconds

37 seconds

1<sup>st</sup> place

2<sup>nd</sup> place

3<sup>rd</sup> place

Write the following morning times in the correct place.

Half past 7, 8 o'clock, 6 o'clock, half past 8.

earliest \_\_\_\_\_



latest \_\_\_\_\_