

Time to the hour



Match the clocks to the correct time.



9 o'clock



12 o'clock



2 o'clock



4 o'clock



6 o'clock



10 o'clock

What time is shown on each of the clocks?



_____ o'clock



_____ o'clock



_____ o'clock



_____ o'clock



_____ o'clock



_____ o'clock

Time to the hour



Write the times shown on the clocks.



_____ o'clock



_____ o'clock



_____ o'clock



_____ o'clock



_____ o'clock



_____ o'clock



_____ o'clock



_____ o'clock



_____ o'clock



_____ o'clock



_____ o'clock



_____ o'clock

Time to the hour




Write the times shown on the clocks.



Draw the time


Draw the times on the clocks.




12 o'clock



3 o'clock



7 o'clock




6 o'clock



4 o'clock




1 o'clock




11 o'clock




8 o'clock



10 o'clock



5 o'clock



2 o'clock



9 o'clock

Challenge cards



Problem solving and reasoning cards:

Match the clocks to the correct time.



I am five hours after 3 o'clock.



I am three hours after 11 o'clock



I am the hour before 11 o'clock.

True or false?

- a) At 6 o'clock the hour hand and minute hand will point at the same number. _____
- b) At 3 o'clock the hour hand will point at 12. _____
- c) Two o'clock is an hour later than 3 o'clock. _____
- d) Three hours before 12'clock is nine o'clock. _____
- e) 12 noon and 12 midnight will look the same on the clock? _____

List events that would take approximately:

More than an hour	
Less than one hour.	



What activities could be done at this time?

Colour the time that is six hours later.



- 4 o'clock
- 5 o'clock
- 6 o'clock

Match the times to the events.

- | | |
|--------------|-----------------|
| Nine o'clock | Break time |
| 3 o'clock | School register |
| 12 o'clock | Home time |
| 10 o'clock | Lunch time |