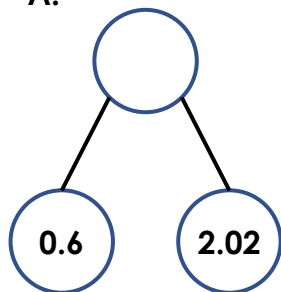


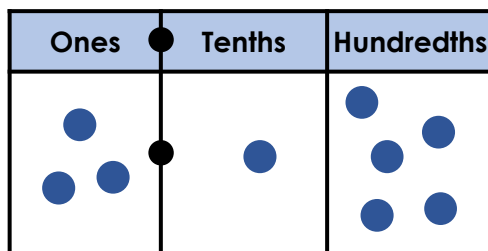
Write Decimals

1. Write the decimal number for each of the following representations.

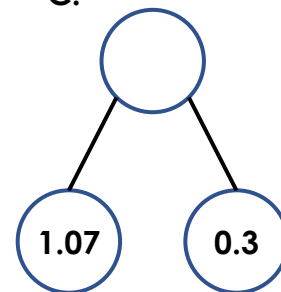
A.



B.



C.



D.

Four ones, six tenths and one hundredth.

E.

Five tenths and three hundredths.

2. Match each statement to the correct number.



My number has 3 tenths.



My number is greater than Joe's and has 4 tenths.



My number is greater than all the other numbers.



My number has the same amount of tenths as hundredths.

1.42

1.47

1.34

1.44

Joe =

Jane =

Sarah =

Ivan =

3. Use the clues and the place value chart to write 5 possible decimal numbers.

Ones	Tenths	Hundredths
●		
	●	

There are 4 tenths.

There are more ones than tenths.

The hundredths are a multiple of 3.

1. .

2. .

3. .

4. .

5. .