

Reception home learning

Friday 21st January



Phonics



Our new sound today is 'ar' in look.


Watch and join in with this video-

[Phase 3 Phonics for Kids #19 - 'ar' - YouTube](#)

Now try this game-

[Phonics Play \(phonicsplay.co.uk\)](http://phonicsplay.co.uk)

Click on play, then phase 3, then 'ar'.




English



It's Friday and it's Super 6 day!

Today we get to see which book is next of our super 6 books for this half term...

This weeks book is...



English

[Reception Key Text : Coming to England by Floella Benjamin - YouTube](#)



Listen to the story.
On the next page there are some questions for you to answer about the story.
Talk to your grown up and ask them to ask you the questions...

Where is Trinidad?

Can you use google maps to find out where in the world Trinidad is?

Have a look around and see what type of place Trinidad is.

Do you think it is hot or cold?

How is it the same and England and what do you notice that is different?

What makes you think this?



Look at the girl on the front cover of the book.

What do you think she is doing?

How do you think she is feeling?

[Google Maps](https://www.google.com/maps)



Who was in Floella's family?

Who do you think Marmie and Dardie were to Floella?

Why did Dardie want to go to England?

What sorts of food did they eat in Trinidad?

What did they like to do in Trinidad?

How did Marmie tell them they were to go to England? Why do you think she didn't phone them?

What did the children pack to take to England with them?

How did they get to England?

How long did it take them to get to England?

What did they do on the boat?

How did the weather change as they got closer to England?

Why do you think Marmie gave her a cardigan when she got off the boat?

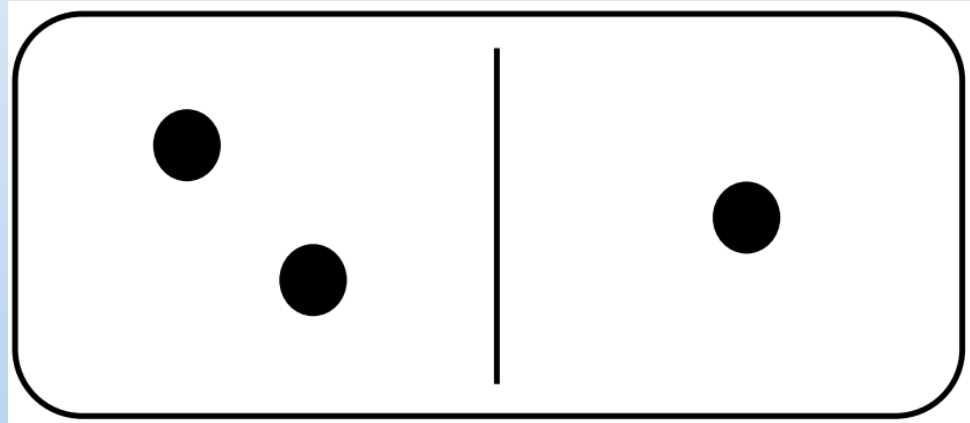
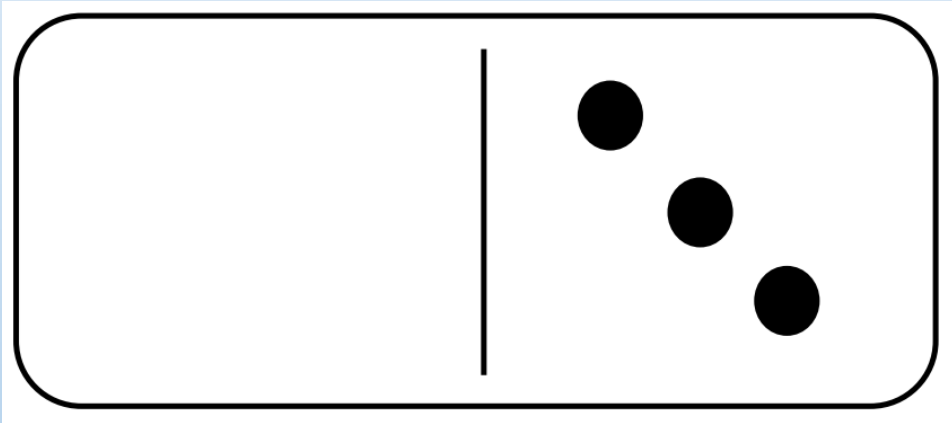
What was it like when they started school? Why do think this was?

Do you think Floella is happy that they moved to England? What makes you think this?



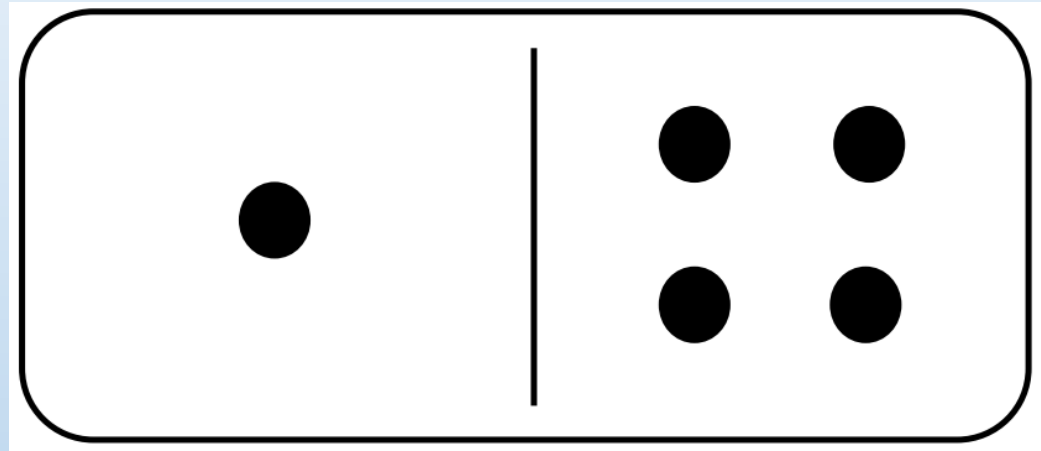
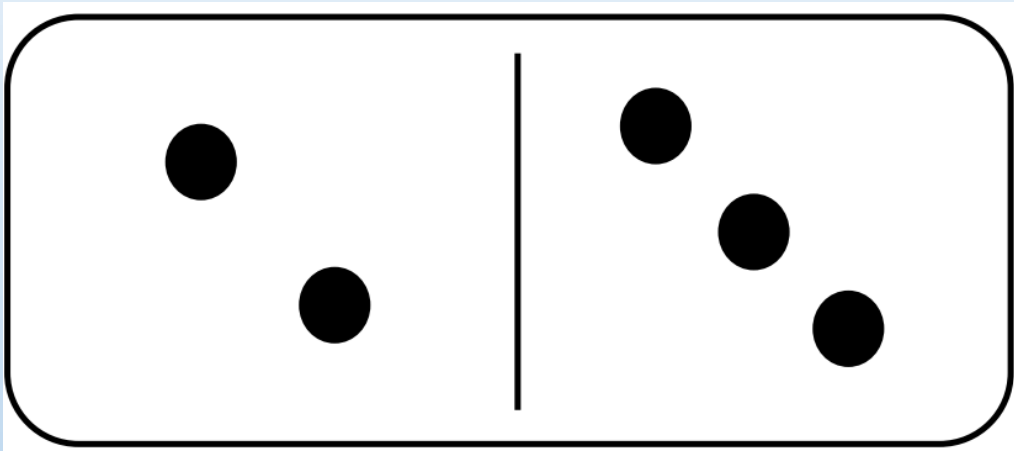
Maths

Have a look at these dominos- what is the same and what is different?



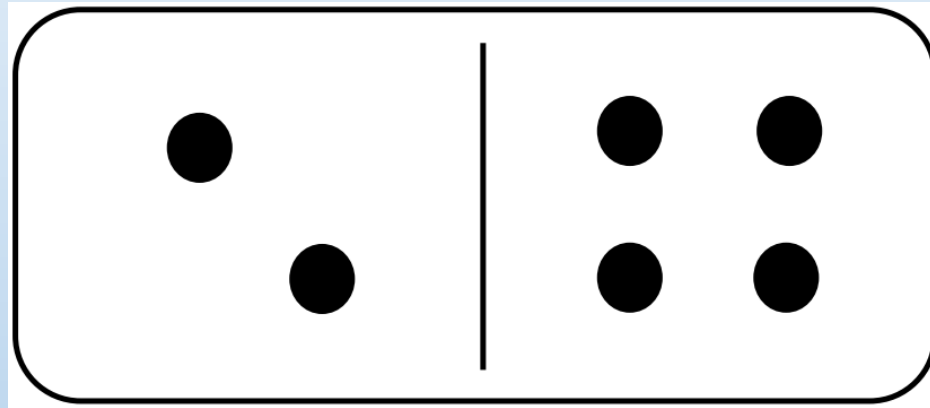
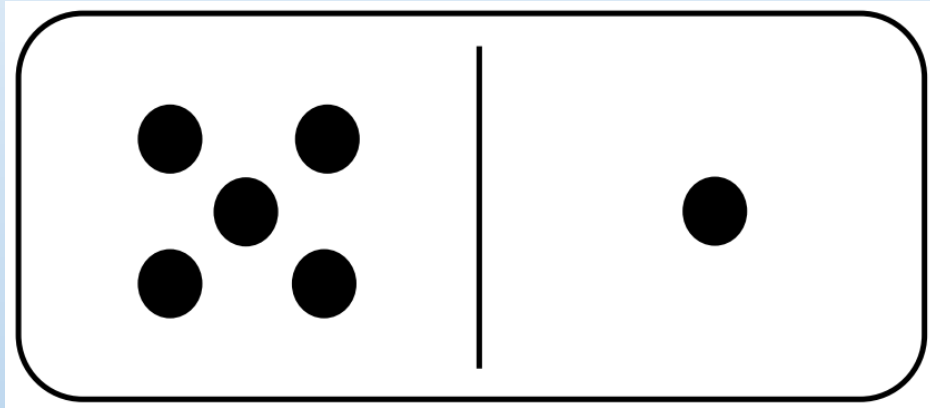
Maths

Have a look at these dominos- what is the same and what is different?



Maths

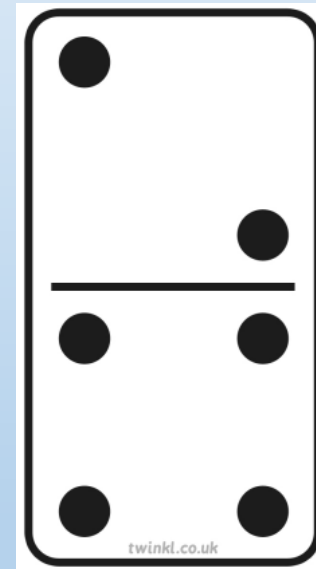

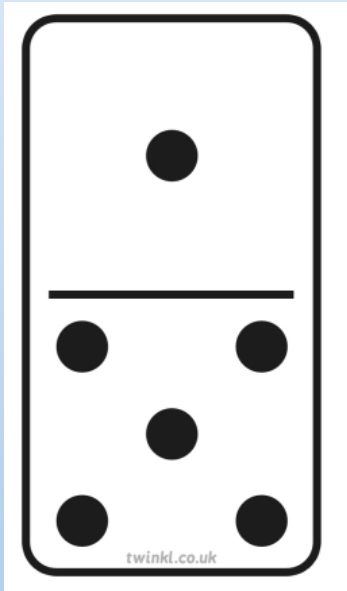
Have a look at these dominos- what is the same and what is different?



Maths

Matching numbers 6, 7 and 8. Can you find the pair?

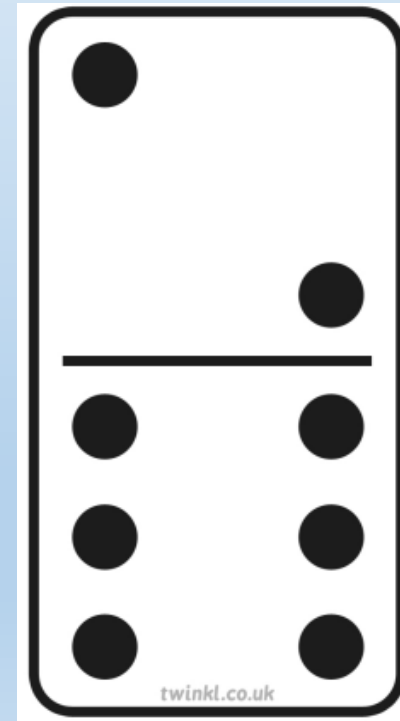
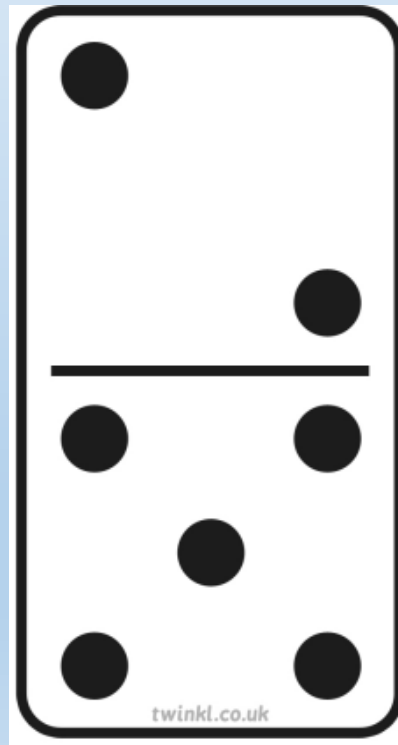

What is different about the pair?



Maths

Matching numbers 6, 7 and 8. Can you find the pair?

What is different about the pair?



How many different ways to make 8 can you find using a blank domino?

