

# Year 1 home learning

Friday 21<sup>st</sup> January

# Phonics



Our new sound today is '**oe**' in lawn.

Watch and join in with this video-

[Phase 5 Phonics for Kids #12 'oe' - YouTube](#)

Now try this game-

[Dragons Den \(phonicsplay.co.uk\)](#)

Click on play, then phase 5, then 'oe'.


# English



It's Friday and it's Super 6 day!

Today we get to see which book is next of our super 6 books for this half term...

This weeks book is...



# English

[Reception Key Text : Coming to England by Floella Benjamin - YouTube](#)



Listen to the story.  
On the next page there are some questions for you to answer about the story.  
Talk to your grown up and ask them to ask you the questions...

Where is Trinidad?

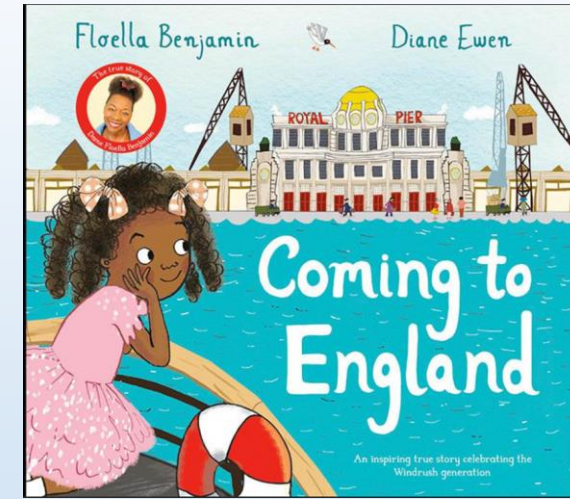
Can you use google maps to find out where in the world Trinidad is?

Have a look around and see what type of place Trinidad is.

Do you think it is hot or cold?

How is it the same and England and what do you notice that is different?

What makes you think this?



Look at the girl on the front cover of the book.

What do you think she is doing?

How do you think she is feeling?

[Google Maps](https://www.google.com/maps)



Who was in Floella's family?

Who do you think Marmie and Dardie were to Floella?

Why did Dardie want to go to England?

What sorts of food did they eat in Trinidad?

What did they like to do in Trinidad?

How did Marmie tell them they were to go to England? Why do you think she didn't phone them?



What did the children pack to take to England with them?

How did they get to England?

How long did it take them to get to England?

What did they do on the boat?

How did the weather change as they got closer to England?

Why do you think Marmie gave her a cardigan when she got off the boat?

What was it like when they started school? Why do think this was?

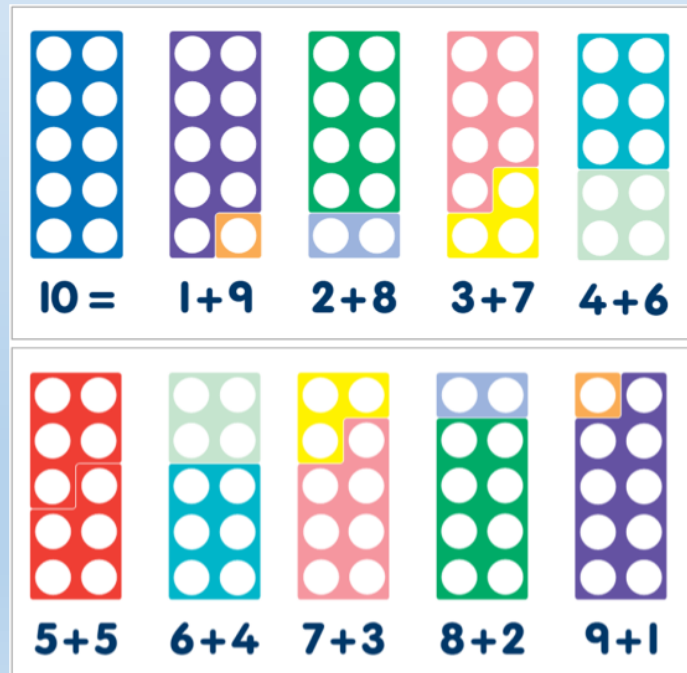
Do you think Floella is happy that they moved to England? What makes you think this?



# Maths

Today we are learning how our number bonds to 10 can help us to know number bonds to 20.

[I Know My Number Bonds 10 | Number Bonds to 10 | Addition Song for Kids | Jack Hartmann - YouTube](#)



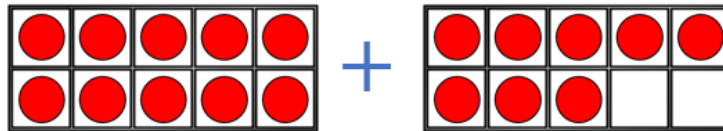


# Maths

Today we are learning how our number bonds to 10 can help us to know number bonds to 20.

Add on from 10

I like adding on to the number 10

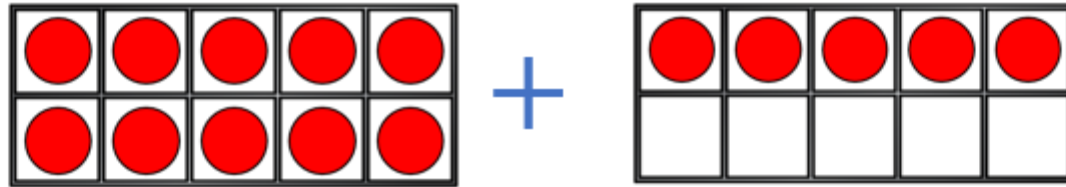


10 add 8 is equal to

M 11

# Add on from 10

I like adding on to  
the number 10



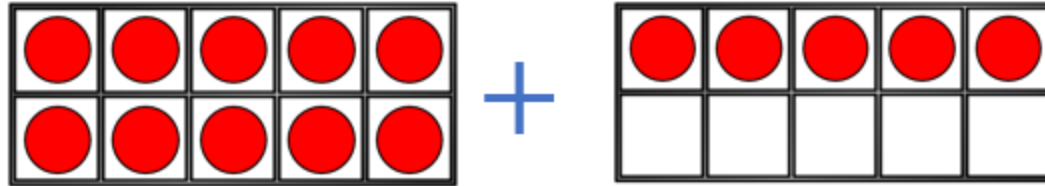
10 add 5 is equal to

# Making 10

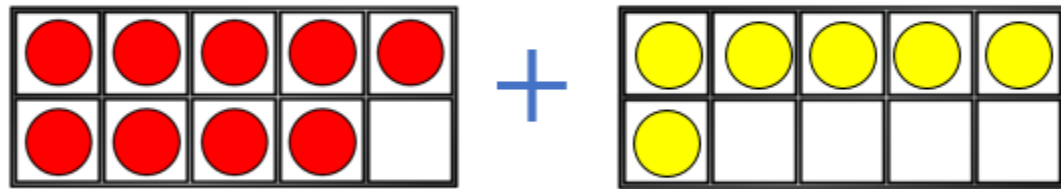
I only like adding  
on to the number  
10



You can make  
10 with other  
numbers!



$$10 + 5 = \square$$

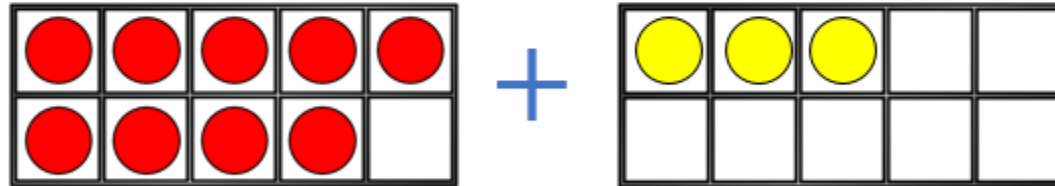


9 + 6 is equal to 10 + 5

# Maths

## Making 10

This makes it  
easier to add!



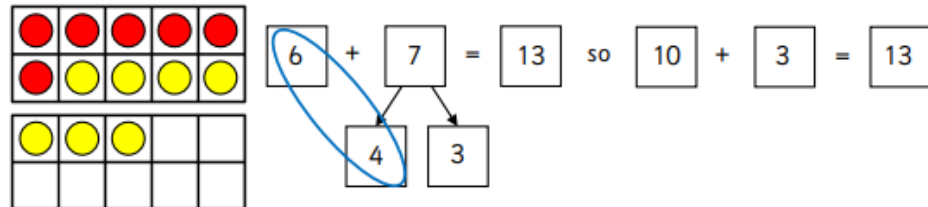
$$9 + 3 \text{ is equal to } 10 + \square$$

# Add by making 10

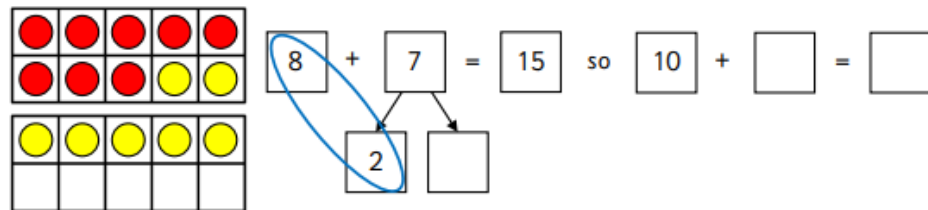


- 1 Use the ten frames and part-whole models to find the total.  
The first one has been completed for you.

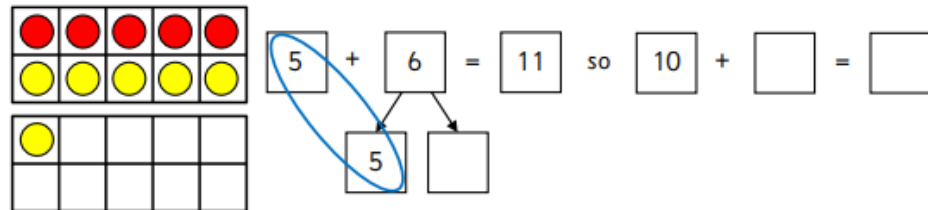
- a Asha has 6 sweets. She gets 7 more.  
How many altogether?



- b Dom has 8 cookies. He gets 7 more.  
How many altogether?



- c Matt has 5 balloons. He gets 6 more.  
How many altogether?



- d Che has 9 apples. He gets 8 more.  
How many altogether?

